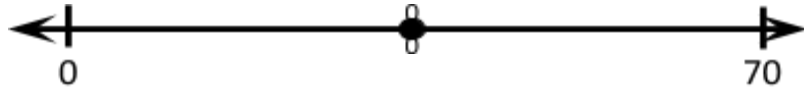


## Using Number Lines to Develop Number Sense

What number do you think is marked on this number line?  
Be ready to explain your answer.




## Using Number Lines to Develop Number Sense


What number do you think is marked on this number line?  
Be ready to explain your answer.




What number do you think is marked  
on this number line?  
Be ready to explain your answer.



What number do you think is marked  
on this number line?  
Be ready to explain your answer.



Where would the number 10,000  
go on this number line?  
Mark the spot with a ●. Be ready to explain your answer.



Where would the number 10,000  
go on this number line?  
Mark the spot with a ●. Be ready to explain your answer.

